




Name _____

Date Due Monday, May 11



Safety Signals, Safety Rules

In the space provided, draw and label the three hand signals used in bike safety.



Choose one bike safety rule and one pedestrian safety rule. On the lines provided, explain why each safety rule is so important.
